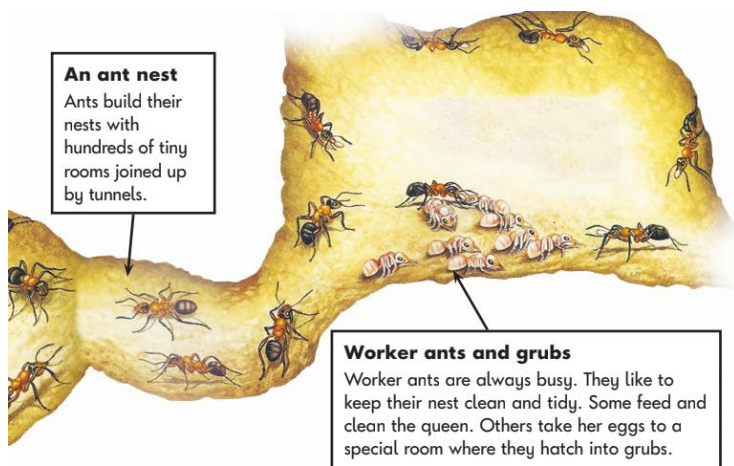


Here are some examples of the kinds of questions children will be asked during the assessment:

Reading Paper 1 (questions interspersed)



Just in time they reached the island, and carried the basket ashore.
 Frog lifted the lid. "This is definitely our lucky day," he said.
 It was somebody's picnic...
 "This is what I call an adventure," said Frog.
 Monster ate and ate until he was full up. He stretched out in the shade of a palm tree.
 Frog felt tired too. Soon they were both fast asleep.

3 What joins the rooms in an ant nest together?

12 How do you know that Frog was excited?

13 What did Frog find inside the basket?

14 Where did Monster go to sleep?

Reading Paper 2 (separate questions to the reading booklet)

For years he's drained me and dirtied me.

What does the word *drained* mean?

Tick **one**.

- filled up with water
- stirred up the water
- emptied out the water
- worn out the water

Put ticks in the table to show which sentences are **true** and which are **false**.

One has been done for you.

The information says that...	True	False
recycling is a good way to get rid of unwanted plastics.	✓	
we should use more things made of plastic.		
today we use plastics a lot.		
plastic is hard to get rid of.		
plastics rot.		

The blackbird said: "You and I are at war."

How do you know that the king was **not** worried by this?

Grammar, Punctuation and spelling Paper

Tick the correct word to complete the sentence below.

I hope _____ we will play musical chairs at the party.

Tick **one**.

when

if

that

because

Circle the **verbs** in the sentence below.

Yesterday was the school sports day and Jo wore her new running shoes.

Tick one box to show where a **comma** should go in the sentence below.

Tick **one**.


Aisha found some red blue and purple beads in the box.

Maths Arithmetic Paper

$$65 + \boxed{} = 93$$

$$\frac{1}{4} \text{ of } 20 = \boxed{}$$

$$35 \div 5 = \boxed{}$$



Maths Reasoning Paper

Sam is collecting cards.

He wants to collect **100** cards altogether.

Last week he collected **50** cards.

This week he collects **30** cards.

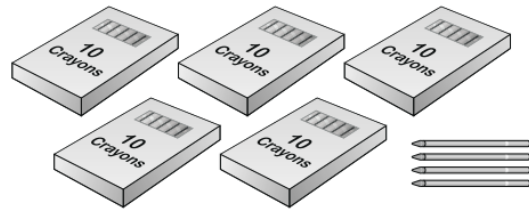


How many **more** cards does he need?

cards

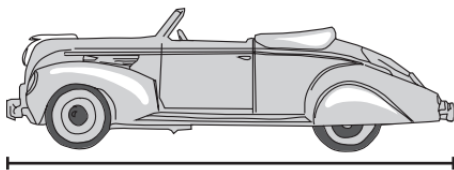
Here are Abdul's crayons.

How many crayons does Abdul have?



crayons

Use a ruler to measure the length of the toy car.




cm

Sam has 55p.

Ben has 10p less than Sam.

Tick the coins that **Ben** has.



All previous papers are available to download by using google for example; 'KS1 SATs reading paper 2016' (the past three years are available to download from satpapers.org.uk).

There are still areas of the curriculum we are yet to teach the children, therefore they will not know how to answer some of the questions.

How can you help?

- Outstanding attendance and punctuality.
- Support at home with; homework, reading (at least 3 times a week), weekly spellings, securing all high frequency words on spelling shed, knowing 2, 5, and 10 times tables.
- Lots of sleep and plenty of rest.
- Limit (& reduce) screen time.
- Get outdoors.
- Eating healthy; (fresh fruit, vegetables, fish, milk) cut down on sugars, fats and salt.
- Liaise with school if you have any issues/concerns at any point.
- Reassure your child that we want them to do their best but there is also more to life at St Wilfrid's when you are 6 or 7 years old and there is nothing to worry about!